






Ch. Chhabil Dass Public School (J.W)

Class: 2

Subject: Maths

Cycle-1


Q1. Rohit had collected balls of different colours. He had made a chart below:

Red	
Yellow	
Blue	
Green	
Black	

Answer the questions below:

- a. Which colour of balls did he collect the most in number? _____
- b. Which colour of balls did he collect same in number? _____ and _____
- c. Which colour of balls did he collect the least in number? _____
- d. How many yellow balls did he collect? _____
- e. How many blue and black balls did he collect? _____

Q2 Complete the pattern



Q3 Fill in the missing numbers

(a) 40, 50, 60, _____, _____

(b) 167, 168, 169, _____, _____

Q4 Write counting from 137 – 148

H	T	O

Q5 Number dodging

H	T	O

Q6 Fill in the missing numbers on the number line



Q7 Arrange the following numbers in increasing order

(a) 102 75 159

(b) 191 141 180

Q8 Arrange the following numbers in decreasing order

(a) 145 98 200

(b) 134 187 106

Q9 Circle the smallest number

104 117 94

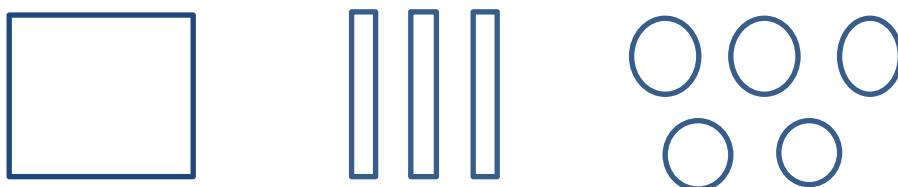
Q10 Circle the greatest number

110 198 151

Q11 Show the number using for hundreds, | for tens, 0 for ones: -

142

Q12 Frame the number.



H	T	O
---	---	---

Q13 Write the number names: -

(a) 142 - _____

(b) 107 - _____

Q14 Put the sign (<, > or =)

(a) 40 _____ 140 (b) 168 _____ 152

Q15 What comes after?

(a) 114 _____ (b) 179 _____

Q16 What comes before?

(a) _____ 106 (b) _____ 100

Q17 Addition

T O
4 6
+2 3

T O
5 4
+3 0
+1 3

Q18 Subtraction

T O
9 8
-6 2

T O
5 7
-3 7

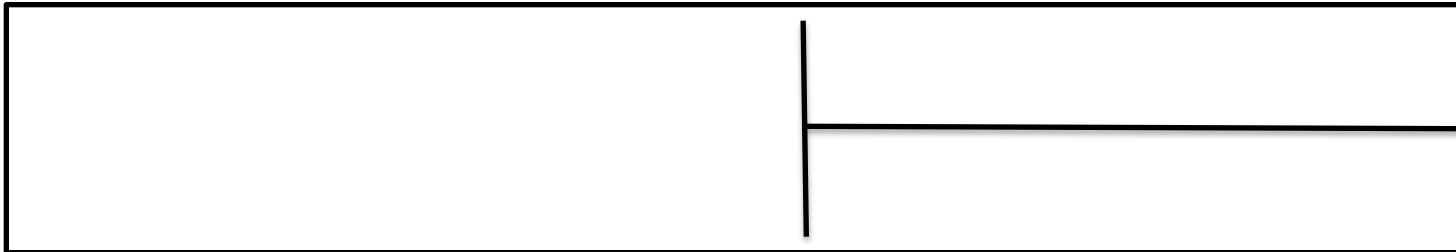
Q19 Fill ups

(a) $15+0=$ _____

(b) $10 +1 =$ _____

Q20 Draw pictures to show equal groups. Then write the addition and multiplication sentences

(a) 3 groups of 2each



Q21 Find the number of balloons in each group. Then complete the addition sentence and its multiplication sentence.



_____ groups

_____ balloons in each group

_____ + _____ + _____ + _____ = _____

4 groups of 2 balloons are _____ balloons.

Q22 Fill ups

- (a) _____ comes after 148
- (b) _____ comes between 170 and 172
- (c) 4 tens 2 ones are _____
- (d) Numeral for One hundred eighty is _____
- (e) 10 tens = _____ hundred
- (f) Place value of 6 in 165 is _____

Q23 These were 46 Hindi books and 13 English books in the library. How many books were there in all?

	T	O
<input type="text"/>		


Answer - _____

Q24 A shopkeeper had 35 toffees. He sold 12 toffees . How many toffees were left with him?

	T	O
<input type="text"/>		

Answer - _____

Q25 The | stands for tens and ○ stands for ones. Count the tens and ones shown in the picture.



_____ tens _____ ones is

_____ + _____

Q26 Write in the expanded form:-

(a) $175 =$ _____ hundred + _____ tens + _____ ones

_____ + _____ + _____

(b) $109 =$ _____ hundred + _____ tens + _____ ones

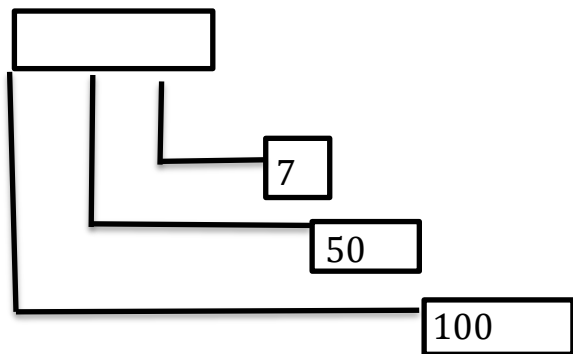
_____ + _____ + _____

Q27 Write in the short form :-

(a) $1 \text{ hundred} + 4 \text{ tens} + 9 \text{ ones} =$ _____

(b) $100 + 60 =$ _____

Q28 Form the number :-



Q 29 Fill in the place value of the digits:-

